

単元別問題

ねん くみ ばん なまえ

1 に あてはまる かずを かきましょう。

(1)

1 と 9 で

(2)

3 と で 10

(3)

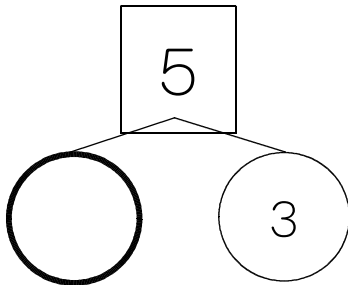
と 6 で 10

(4)

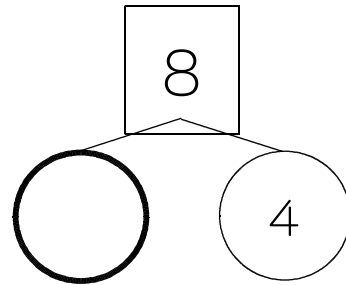
と 3 で 10

2 あわせて になるように ○ に あてはまる かずを かきましょう。

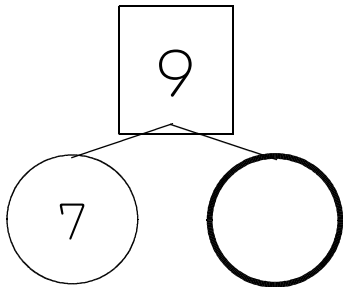
(1)



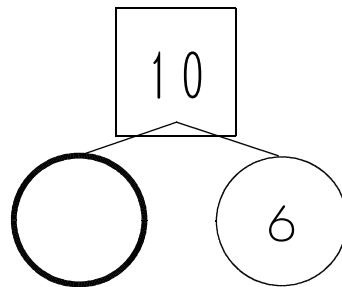
(2)



(3)



(4)



単元別問題


こたえ

1

(1)

1 と 9 で


10



(3)


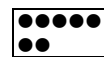

4

と 6 で 10



(2)

3 と 7 で 10



(4)

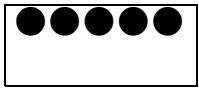
7

と 3 で 10

7 (●●●●●●●) と
3 (●●●) をあわせると
10 (●●●●●●●●●●) になります。

2

(1)

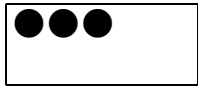



5

5 (●●●●●) は、
2 (●●) と
3 (●●●) に
わけられます。


2

3



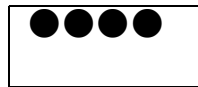
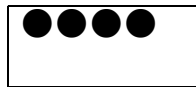
(2)

8




4

4



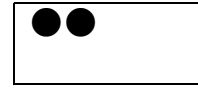
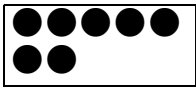
(3)

9




7

2



(4)

10



4

6

